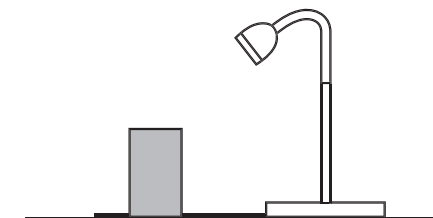
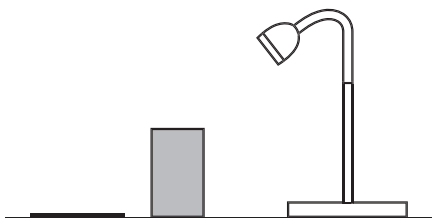
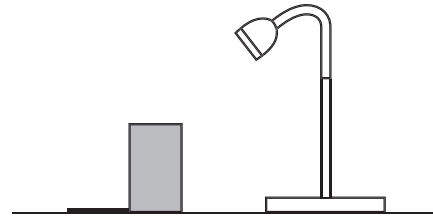
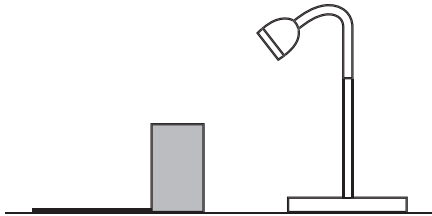


Next Step Answers

Look at the pictures below. Which picture shows the correct length and direction of the shadow made by the block?

Tick **one**.



Look at the pictures below. Which picture shows the correct length and direction of the shadow made by the block?

The block is grey and shiny.



The block is smooth and rigid.



The block is solid and opaque.



The block is hard and transparent.

